

Summer Themed Maths Activity Booklet


Name: _____



Addition and Subtraction to 20

Colour by Number

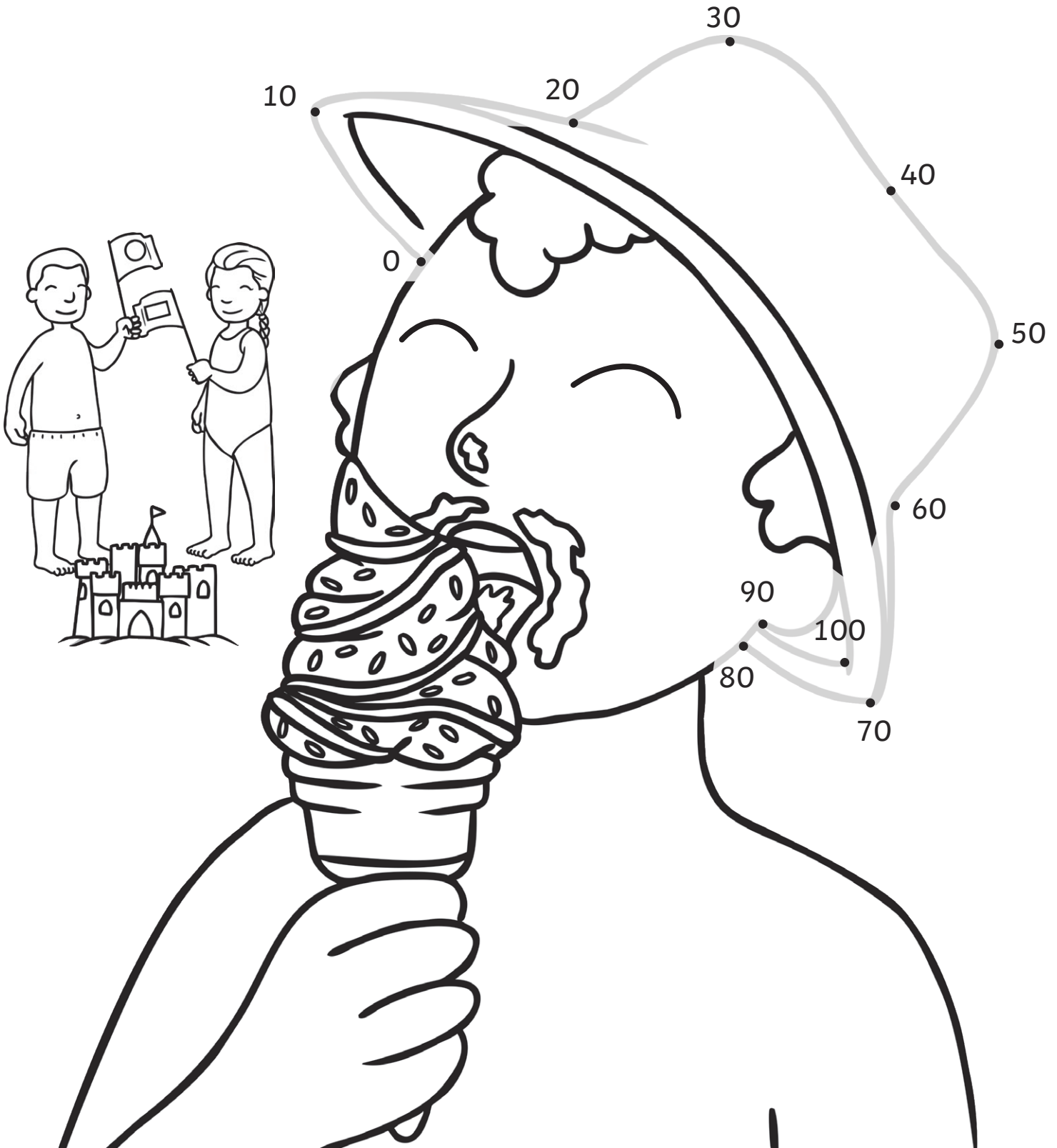
Solve the calculations to colour in this summer picture.



Answer:	16	15	20	12	13
Colour:	red	yellow	green	brown	blue

Counting in 10s Dot to Dot

Join the dots to reveal the picture!



Addition and Subtraction to 20

Summer Mosaic

Solve the calculations to reveal the hidden picture. Each answer has a special colour.

yellow = 0-8

pink = 9-15

brown = 16-20

						$17 - 1$	
			$19 - 4$	$9 + 6$		$17 + 2$	
		$10 - 1$	$6 + 5$	$19 - 10$	$12 + 2$	$18 - 2$	
	$15 - 4$	$12 + 3$	$18 - 9$	$11 + 2$	$17 - 2$	$5 + 8$	
	$20 - 20$	$5 + 2$	$17 - 9$	$2 + 6$	$2 - 1$	$2 + 2$	
	$9 - 1$	$8 + 0$	$10 - 2$	$1 + 6$	$18 - 10$	$4 + 3$	
		$14 - 7$	$6 - 3$	$3 + 2$	$5 + 2$		
			$7 - 4$	$20 - 12$			
			$5 + 1$	$2 + 6$			











Challenge: You have 5 ice creams. You eat 2. How many do you have left? Write this problem as a calculation.

I Spy and Count to 20

Count the summer objects and write the numeral and number words.







I Spy and Count to 20

Object	Numeral	Number Word	Object	Numeral	Number Word
					
					
					
					
					

2D Shape Hunt

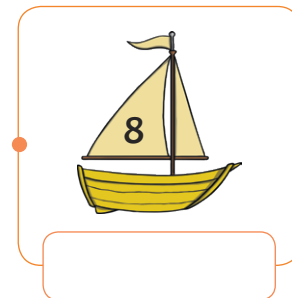
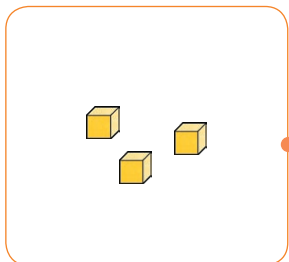
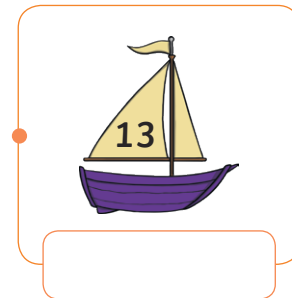
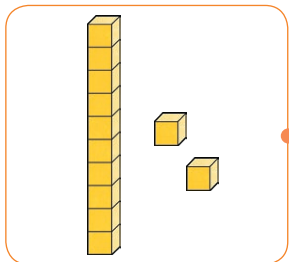

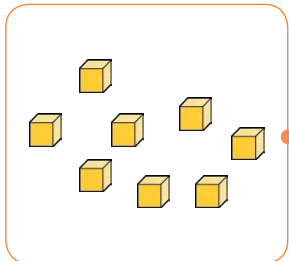

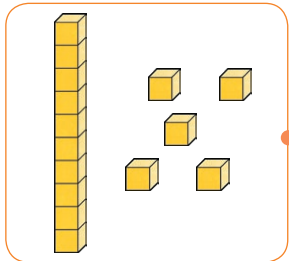

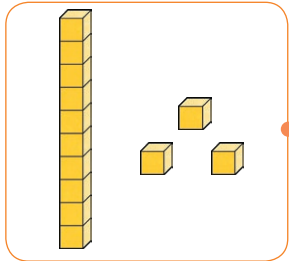
Count and colour the 2D shapes hidden in this summer scene.



Number Representations to 20 Match Up

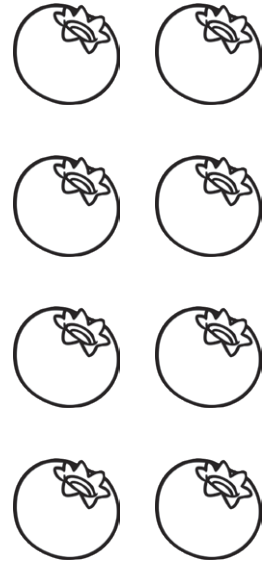


Draw a line to match the boats to the correct number representation.
Write the number in words.



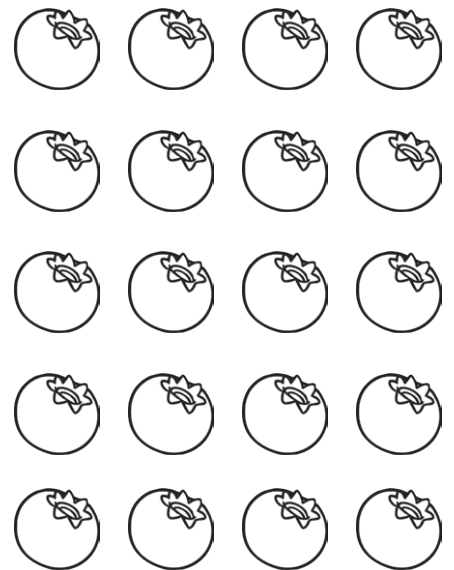


Summer Fruits Fractions

Colour the correct fractions of the fruits.

For each group of summer fruits, colour in $\frac{1}{2}$.



For each group of summer fruits, colour in $\frac{1}{4}$.



Summer Holiday Activities

Board Game

You will need:




























- Counters
- A dice
- Pencil

Instructions

- Each player starts the game with 20 points.
- Take turns to throw the dice and move your counter around the board.
- When you land on a square, add or subtract the points on that square to or from your score.
- When a player reaches the finish, the player with the most points is the winner.


Keep track of your score here:

Name:	Name:	Name:	Name:
20	20	20	20


<p>START</p>	 $+ 10$	 $- 5$			
		 $+ 2$	 $- 1$	 $+ 5$	 $- 2$
<p>FINISH</p>					 $+ 10$
 $+ 10$	 $- 1$	 $+ 2$	 $- 5$		
				 $+ 10$	 $- 3$
				 $+ 4$	
 $- 3$	 $+ 4$	 $- 1$	 $+ 6$		
				 $- 1$	
 $+ 10$					 $+ 6$
 $- 2$	 $+ 5$	 $- 1$	 $+ 2$	 $- 5$	 $+ 10$

Telling the Time


It's time to go on holiday. Use the clocks to help plan the trip.




What time do you get up to go on holiday? _____




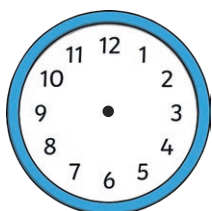
What time do you set off on holiday? _____




What time do you play on the beach? _____



What time do you eat an ice cream? _____



At 4 o'clock, you go swimming. Draw the hands on the clock.



At half past 6, you go to a disco. Draw the hands on the clock.

















If you go on holiday the day after Sunday, what day will you go on holiday? _____


If you go to the beach on the second day of your holiday, what day will you go to the beach? _____

Counting in 2s Maze

Help the frog find the path through the maze to the lily pad counting on in 2s from zero.




	0	2	4	6	8	2	8	
	10		8		10		12	
	2	14	16	14	12	46	4	
	12		18		16		34	
10	8	4	44	20	22	24	32	6
2		22		30		26		36
6	4	36	34	32	30	28	14	2
20		38		28		8		
2	26	40	32	30	28	2		
24		42		46		54		
2	6	44	46	48	50	52		




Picnic Time Multiplication

1. 5 children are on a picnic. Each child eats 2 apples. How many apples are eaten?




Answer:

2. 8 children are on a picnic. Each child eats 2 sandwiches. How many sandwiches are eaten?



Answer:

3. 3 children are on a picnic. Each child eats 5 biscuits. How many biscuits are eaten?



Answer: